

Simplify the radical.

1) $\sqrt{84}$

2) $\sqrt{98}$

3) $\sqrt{16}$

4) $\sqrt{48}$

5) $\sqrt{45}$

6) $\sqrt{65}$

7) $\sqrt{64}$

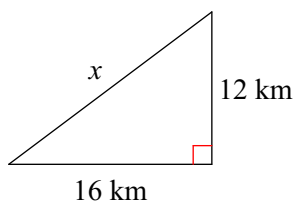
8) $\sqrt{144}$

9) $\sqrt{72}$

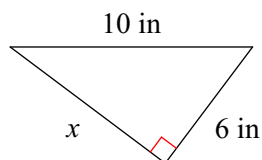
10) $\sqrt{132}$

Find the missing side of each triangle. Simplify the radical

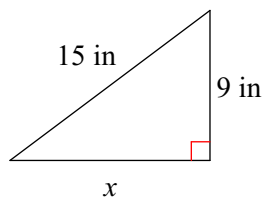
11)



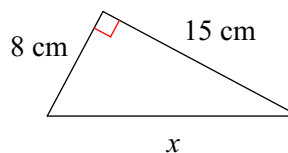
12)



13)

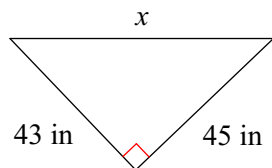


14)

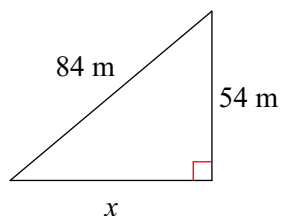


Find the missing side of each triangle. Leave your answers in simplest radical form.

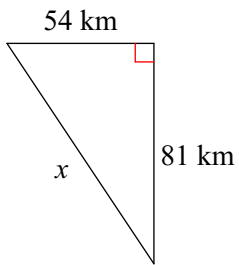
15)



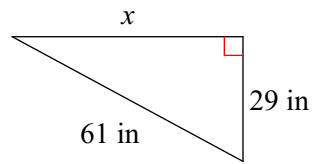
16)



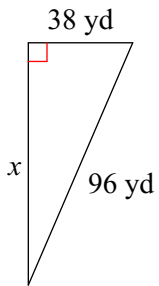
17)



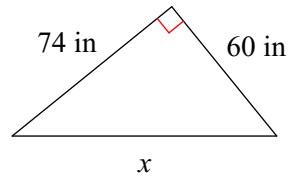
18)



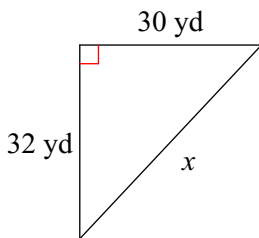
19)



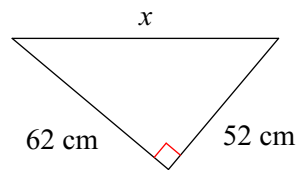
20)



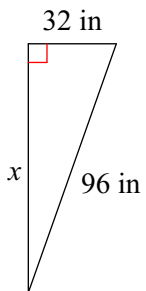
21)



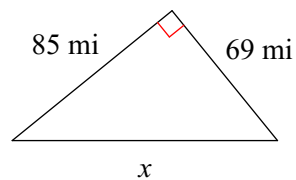
22)



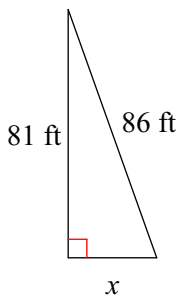
23)



24)



25)



26)

