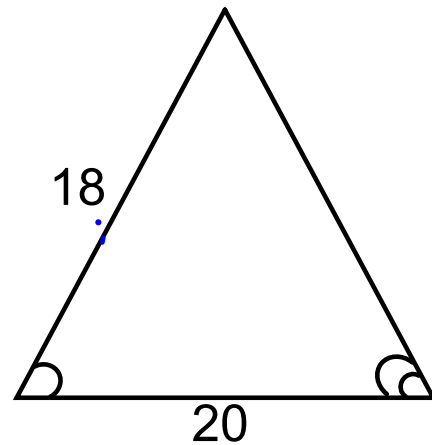
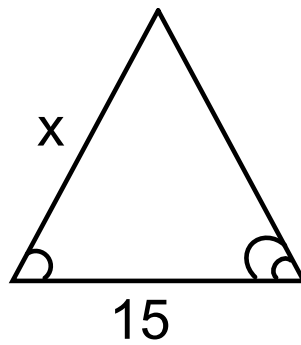


Warm Up: Geometry

1/9

Find x .

Feb 27-7:39 AM

W.A.L.T.:

Apply our understanding of similarity

W.A.S.I.:

We can **decide if the triangles are similar** and **then** use similarity to find the missing side lengths.

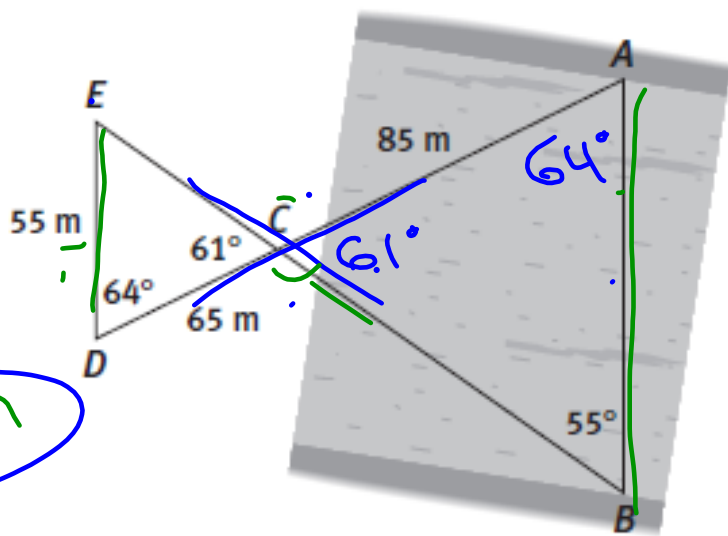
Mar 7-9:45 AM

In Class Work:

pg. 262 #1,2

$$\frac{85}{65} = 1.3$$

$$1.3 \times 55 = 71.5 \text{ m}$$



Mar 7-1:33 PM

Today's Activities:

- In class examples

P.W. for tonight:

- pg. 264 TTA, #3 - 5, pg. 271 #1 - 5

Have questions ready for problems you struggle with.

Day 2

Day 4

Dec 31-9:59 PM